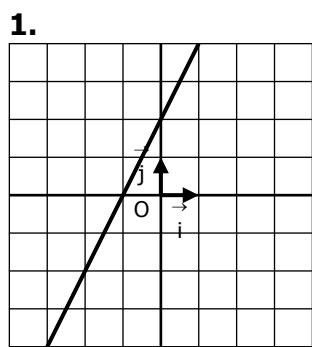
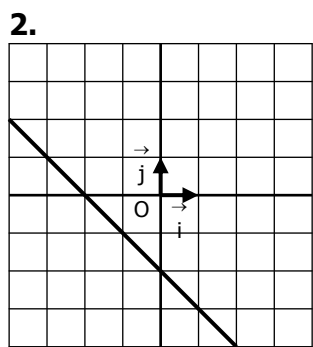


FONCTIONS AFFINES

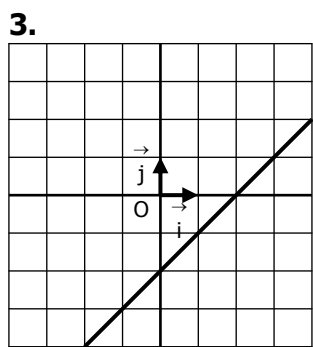
Déterminer graphiquement l'expression de la fonction affine dont on a tracé la courbe :



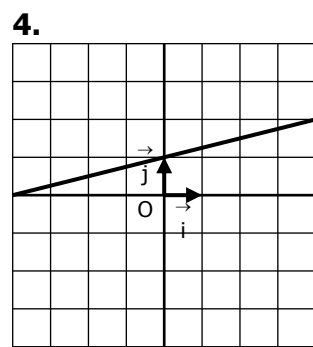
$f(x) = \dots\dots\dots$



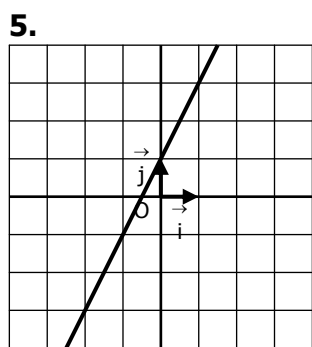
$f(x) = \dots\dots\dots$



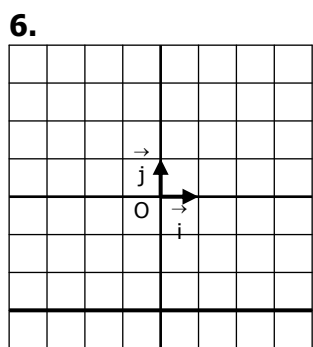
$f(x) = \dots\dots\dots$



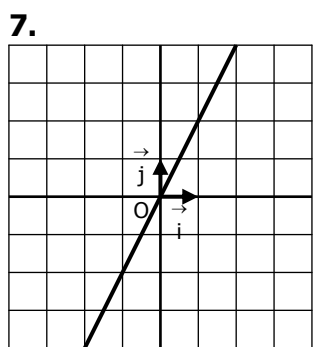
$f(x) = \dots\dots\dots$



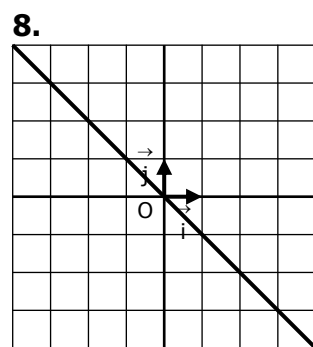
$f(x) = \dots\dots\dots$



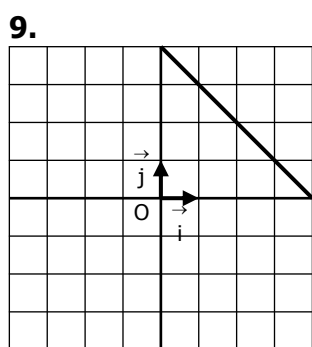
$f(x) = \dots\dots\dots$



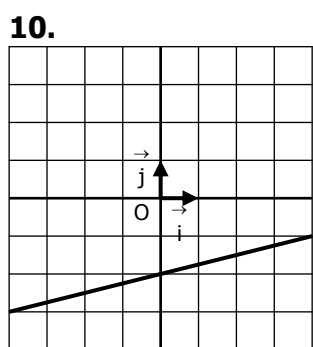
$f(x) = \dots\dots\dots$



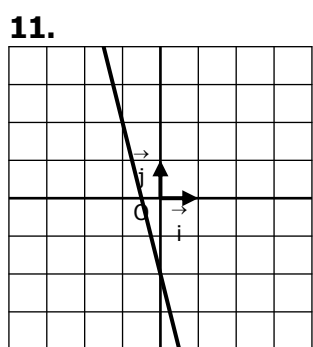
$f(x) = \dots\dots\dots$



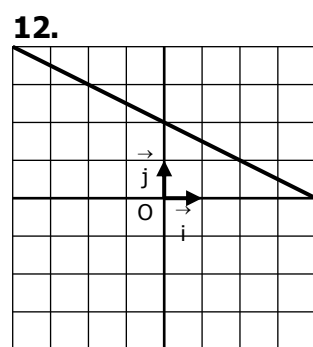
$f(x) = \dots\dots\dots$



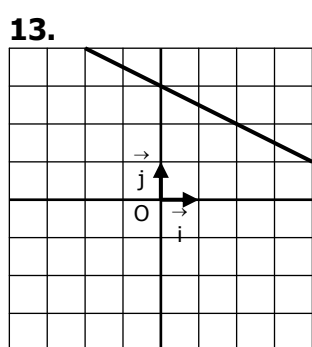
$f(x) = \dots\dots\dots$



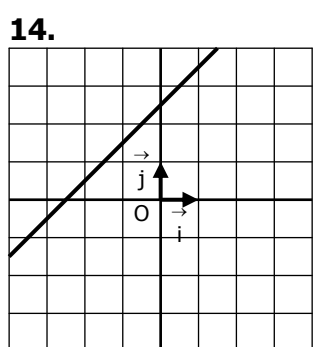
$f(x) = \dots\dots\dots$



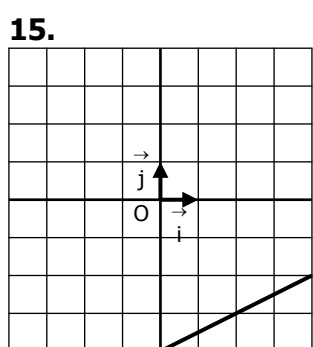
$f(x) = \dots\dots\dots$



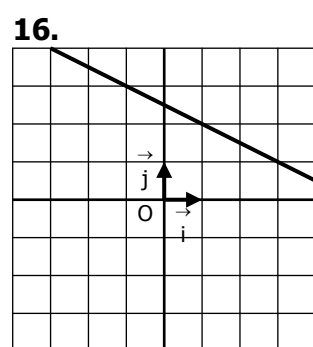
$f(x) = \dots\dots\dots$



$f(x) = \dots\dots\dots$



$f(x) = \dots\dots\dots$



$f(x) = \dots\dots\dots$